


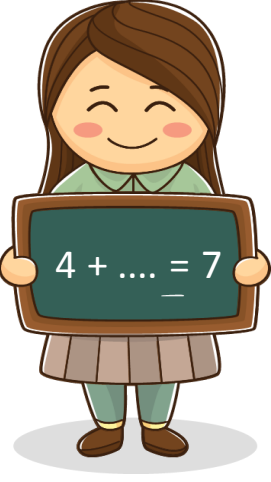





PHIẾU BÀI TẬP CUỐI TUẦN 10 – LỚP 1






Bài 1. Tính nhẩm

	$3 + 2 = \dots$ $8 + 1 = \dots$ $5 + 5 = \dots$		$1 + 4 = \dots$ $8 + 2 = \dots$ $3 + 6 = \dots$		$4 + 0 = \dots$ $0 + 5 = \dots$ $6 + 0 = \dots$
---	---	---	---	---	---

Bài 2. Số?

			
--	--	---	--

Bài 3. Tô màu các phép cộng có kết quả là 9:

				
---	---	---	--	---

Bài 4. Nói theo mẫu



Lò vi sóng



Hộp quà



Hộp khăn giấy

KHỐI LẬP
PHƯƠNG

KHỐI HỘP
CHỮ NHẬT



Hộp y tế



Hộp sữa



Bánh chưng