

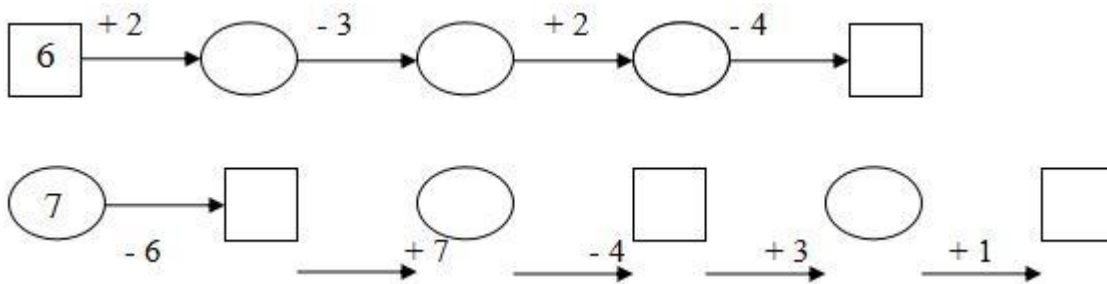
Bài 1. Tính:

$1 + 6 = \dots$	$7 - 3 = \dots$	$7 + 0 = \dots$	$7 - 0 = \dots$
$2 + 5 = \dots$	$7 - 2 = \dots$	$6 + 1 = \dots$	$7 - 1 = \dots$
$3 + 4 = \dots$	$7 - 5 = \dots$	$5 + 2 = \dots$	$7 - 6 = \dots$

Bài 2. Tính:

$\begin{array}{r} 7 \\ - 3 \\ \hline \end{array}$	-	$\begin{array}{r} 7 \\ - 0 \\ \hline \end{array}$	+	$\begin{array}{r} 2 \\ + 6 \\ \hline \end{array}$	-	$\begin{array}{r} 7 \\ - 5 \\ \hline \end{array}$	+	$\begin{array}{r} 5 \\ + 3 \\ \hline \end{array}$	-	$\begin{array}{r} 7 \\ - 7 \\ \hline \end{array}$	+	$\begin{array}{r} 0 \\ + 8 \\ \hline \end{array}$
.....	

Bài 3. Số?

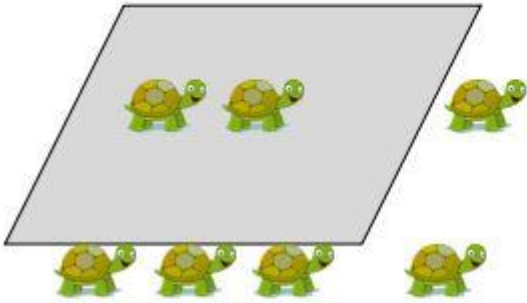


Bài 4. >, <, =?


$3 + 4 \dots 7$	$3 + 5 \dots 7 - 1$	$7 - 2 \dots 7 - 3$
$7 - 2 \dots 6$	$4 + 0 \dots 7 - 3$	$7 + 0 \dots 7 - 0$
$6 + 1 \dots 5$	$3 + 4 \dots 5 + 1$	$1 + 4 \dots 7 - 2$
$4 + 4 \dots 8$	$3 + 4 \dots 2 + 6$	$1 + 7 \dots 8 + 0$

Bài 5. Viết phép tính thích hợp:

Hava MATH



--	--	--	--	--



--	--	--	--	--