





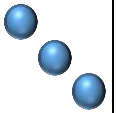

PHIẾU BÀI TẬP CUỐI TUẦN 16 – LỚP 1

**Bài 1. Số?**




a.

						
2	+	4	+	3	=	




b.

						
	+		+		=	

c.

						
	+		+		=	

d.

						
	+		+		=	

**Bài 2. Tính:**

a.  $1 + 1 + 1 = \dots\dots\dots$        $2 + 2 + 1 = \dots\dots\dots$        $5 + 1 + 1 = \dots\dots\dots$

$1 + 1 + 2 = \dots\dots\dots$        $2 + 1 + 3 = \dots\dots\dots$        $7 + 1 + 2 = \dots\dots\dots$

b.  $4 - 1 - 1 = \dots\dots\dots$        $8 - 3 - 1 = \dots\dots\dots$        $5 - 4 - 1 = \dots\dots\dots$

$7 - 2 - 2 = \dots\dots\dots$        $9 - 2 - 3 = \dots\dots\dots$        $6 - 3 - 3 = \dots\dots\dots$

**Bài 3. Tính**



$$7 - 1 - 2 = \dots\dots\dots$$



$$7 - 1 - 1 = \dots\dots\dots$$

### Bài 4. Nối phép tính với kết quả thích hợp

$$7 - 1 - 2$$

$$4 + 2 + 1$$

$$1 + 3 + 1$$

$$6 - 1 - 1$$

3

5

4

7

### Bài 5. Số?

