


## PHIẾU BÀI TẬP CUỐI TUẦN 6 – LỚP 1


**Bài 1.** So sánh: >; <; =



4 ..... 5




.....




.....



.....



.....



.....

**Bài 2.** Số ?

4 < ..... < 6 ; 9 > ..... > 7 ; 5 < ..... < 7 ; 3 > 2 + .....













4 = 2 + ..... ; 1 + 1 > 1 + ..... ; 5 < 2 + ..... ; 3 + 3 = 5 + .....

**Bài 3.** >; <; =

2 < 2 + 1 ; 8 < 2 + 3 ; 3 + 2 < 2 + 3 ; 3 + 1 < 2 + 2

5 < 4 + 1 ; 6 < 2 + 3 ; 3 + 2 < 2 + 4 ; 2 + 1 < 2 + 3

**Bài 4.** Số ?

 +  =  <input type="text"/> + <input type="text"/> = <input type="text"/>	 +  =  <input type="text"/> + <input type="text"/> = <input type="text"/>
 +  =  <input type="text"/> + <input type="text"/> = <input type="text"/>	 +  =  <input type="text"/> + <input type="text"/> = <input type="text"/>

## Bài 5. Tính.

$1 + 5 = \dots$

$2 + 4 = \dots$

$2 + 2 = \dots$

$5 + 0 = \dots$

$4 + 1 = \dots$

$3 + 1 = \dots$

$3 + 3 = \dots$

$2 + 3 = \dots$

$1 + 2 + 0 = \dots$

$2 + 1 + 1 = \dots$

$1 + 2 + 2 = \dots$

$2 + 4 + 0 = \dots$

$2 + 2 + 0 = \dots$

$1 + 2 + 2 = \dots$

$1 + 3 + 2 = \dots$

$3 + 1 + 1 = \dots$